

Cartes à pince
Fractions

Quelle est la fraction de la partie colorée?



$$\frac{1}{3}$$

$$\frac{2}{3}$$

$$\frac{3}{2}$$



$$\frac{1}{3}$$

$$\frac{1}{2}$$

$$\frac{1}{4}$$



$$\frac{10}{2}$$

$$\frac{1}{10}$$

$$\frac{2}{10}$$



$$\frac{1}{3}$$

$$\frac{1}{2}$$

$$\frac{1}{4}$$



$$\frac{3}{4}$$

$$\frac{3}{5}$$

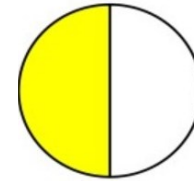
$$\frac{5}{3}$$



$$\frac{1}{2}$$

$$\frac{1}{3}$$


$$\frac{1}{4}$$



$$\frac{1}{2}$$

$$\frac{2}{1}$$

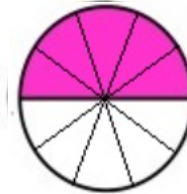
$$\frac{3}{2}$$



$$\frac{3}{4}$$

$$\frac{4}{3}$$

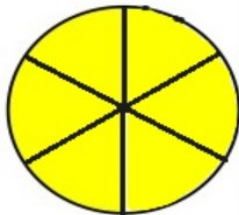
$$\frac{1}{4}$$



$$\frac{10}{5}$$

$$\frac{5}{10}$$

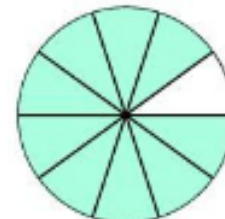
$$\frac{2}{10}$$



$$\frac{1}{6}$$

$$\frac{6}{6}$$

$$\frac{6}{1}$$



$$\frac{10}{9}$$

$$\frac{1}{10}$$

$$\frac{9}{10}$$